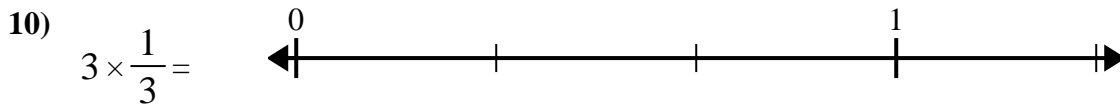
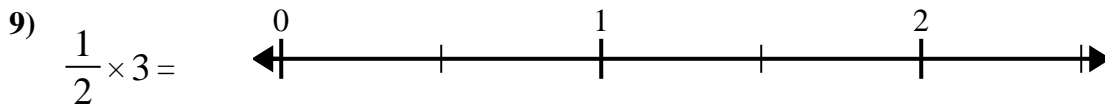
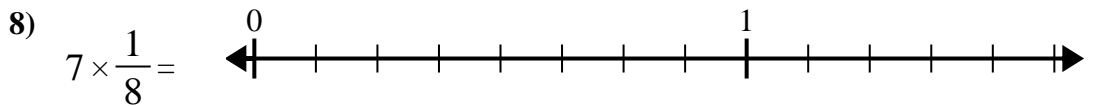
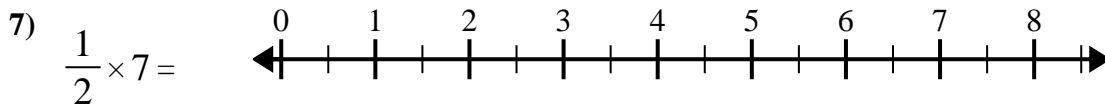
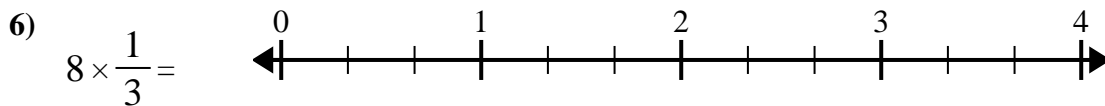
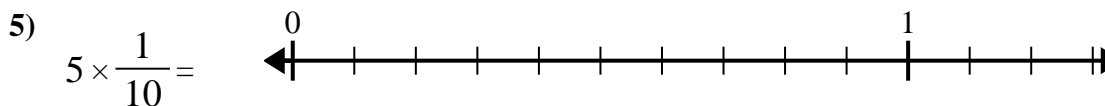
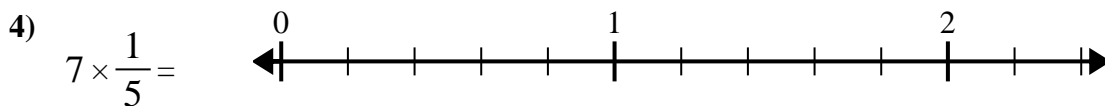
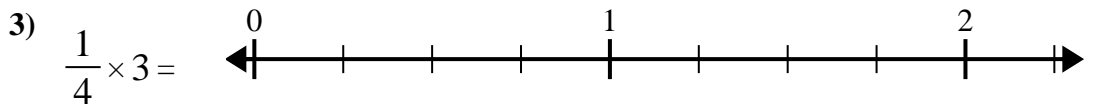
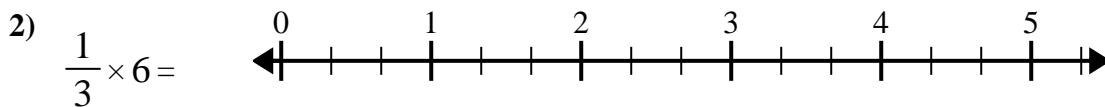
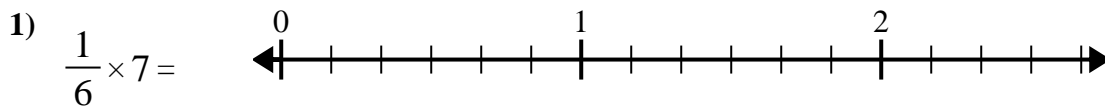




Use the numberline to solve.



Answers

1. _____

2. _____

3. _____

4. _____

5. _____

6. _____

7. _____

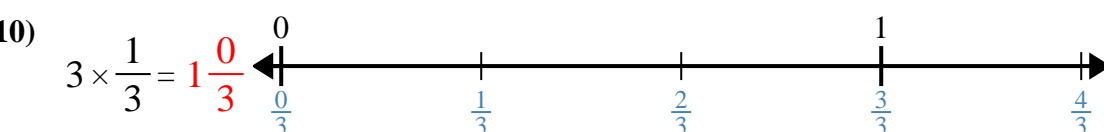
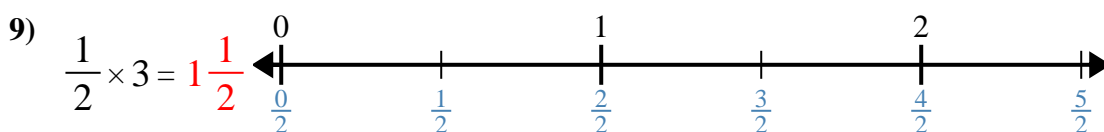
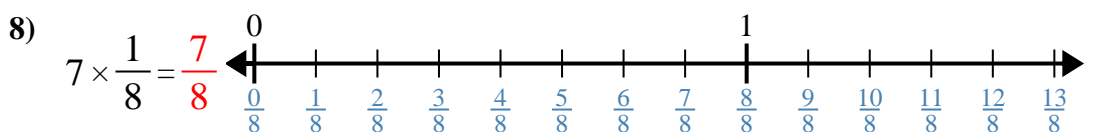
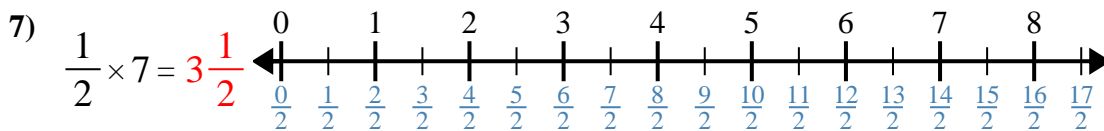
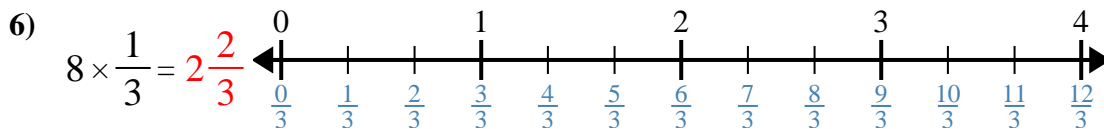
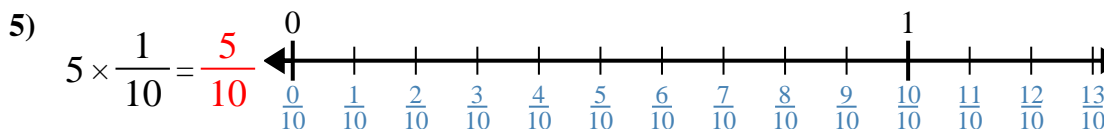
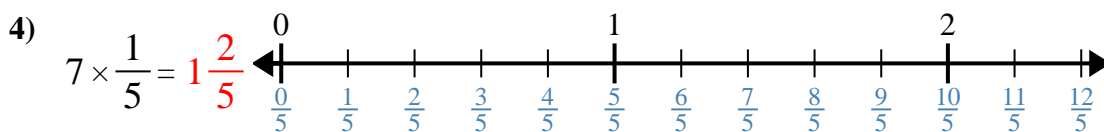
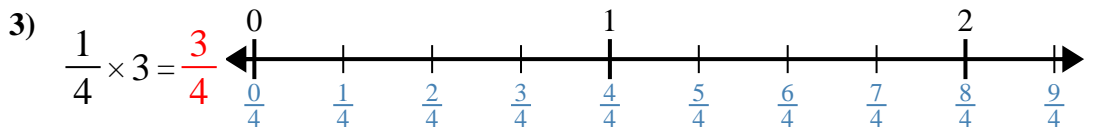
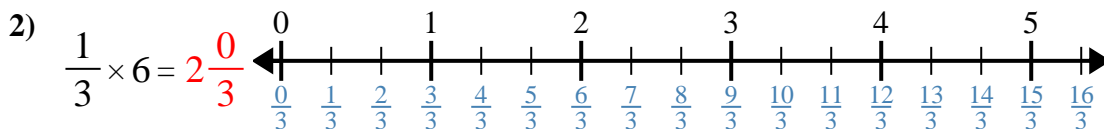
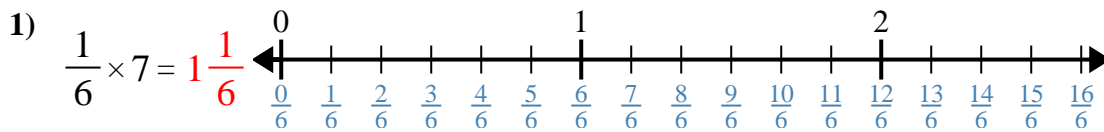
8. _____

9. _____

10. _____



Use the numberline to solve.



Answers

1. 1¹/₆
2. 2⁰/₃
3. 3/4
4. 1²/₅
5. 5/10
6. 2²/₃
7. 3¹/₂
8. 7/8
9. 1¹/₂
10. 1⁰/₃



Use the numberline to solve.

$\frac{5}{10}$	$1\frac{1}{6}$	$1\frac{2}{5}$	$2\frac{0}{3}$
$1\frac{0}{3}$	$1\frac{1}{2}$	$3\frac{1}{2}$	$\frac{3}{4}$
$\frac{7}{8}$	$2\frac{2}{3}$		

Answers

1)

1. _____

2)

2. _____

3)

3. _____

4)

4. _____

5)

5. _____

6)

6. _____

7)

7. _____

8)

8. _____

9)

9. _____

10)

10. _____